

2019

AP[®]

 CollegeBoard

AP[®] Biology

Free-Response Questions

© 2019 The College Board. College Board, Advanced Placement, AP, AP Central, and the acorn logo are registered trademarks of the College Board. Visit the College Board on the web: collegeboard.org.

AP Central is the official online home for the AP Program: apcentral.collegeboard.org.

AP® BIOLOGY EQUATIONS AND FORMULAS

Statistical Analysis and Probability

Mean

$$\bar{x} = \frac{1}{n} \sum_{i=1}^n x_i$$

Standard Deviation

$$s = \sqrt{\frac{\sum(x_i - \bar{x})^2}{n - 1}}$$

Standard Error of the Mean

$$SE_{\bar{x}} = \frac{s}{\sqrt{n}}$$

Chi-Square

$$\chi^2 = \sum \frac{(o - e)^2}{e}$$

Chi-Square Table

p value	Degrees of Freedom							
	1	2	3	4	5	6	7	8
0.05	3.84	5.99	7.82	9.49	11.07	12.59	14.07	15.51
0.01	6.64	9.21	11.34	13.28	15.09	16.81	18.48	20.09

Laws of Probability

If A and B are mutually exclusive, then:

$$P(A \text{ or } B) = P(A) + P(B)$$

If A and B are independent, then:

$$P(A \text{ and } B) = P(A) \times P(B)$$

Hardy-Weinberg Equations

$$p^2 + 2pq + q^2 = 1 \quad p = \text{frequency of the dominant allele in a population}$$

$$p + q = 1 \quad q = \text{frequency of the recessive allele in a population}$$

\bar{x} = sample mean

n = size of the sample

s = sample standard deviation (i.e., the sample-based estimate of the standard deviation of the population)

o = observed results

e = expected results

Degrees of freedom are equal to the number of distinct possible outcomes minus one.

Metric Prefixes

<u>Factor</u>	<u>Prefix</u>	<u>Symbol</u>
10^9	giga	G
10^6	mega	M
10^3	kilo	k
10^{-2}	centi	c
10^{-3}	milli	m
10^{-6}	micro	μ
10^{-9}	nano	n
10^{-12}	pico	p

Mode = value that occurs most frequently in a data set

Median = middle value that separates the greater and lesser halves of a data set

Mean = sum of all data points divided by number of data points

Range = value obtained by subtracting the smallest observation (sample minimum) from the greatest (sample maximum)

<p style="text-align: center;">Rate and Growth</p> <p>Rate $\frac{dY}{dt}$</p> <p>Population Growth $\frac{dN}{dt} = B - D$</p> <p>Exponential Growth $\frac{dN}{dt} = r_{\max} N$</p> <p>Logistic Growth $\frac{dN}{dt} = r_{\max} N \left(\frac{K - N}{K} \right)$</p> <p>Temperature Coefficient Q₁₀ $Q_{10} = \left(\frac{k_2}{k_1} \right)^{\frac{10}{T_2 - T_1}}$</p> <p>Primary Productivity Calculation $\frac{\text{mg O}_2}{\text{L}} \times \frac{0.698 \text{ mL}}{\text{mg}} = \frac{\text{mL O}_2}{\text{L}}$ $\frac{\text{mL O}_2}{\text{L}} \times \frac{0.536 \text{ mg C fixed}}{\text{mL O}_2} = \frac{\text{mg C fixed}}{\text{L}}$ (at standard temperature and pressure)</p>	<p>dY = amount of change dt = change in time B = birth rate D = death rate N = population size K = carrying capacity r_{\max} = maximum per capita growth rate of population</p>	<p>Water Potential (Ψ) $\Psi = \Psi_p + \Psi_s$ Ψ_p = pressure potential Ψ_s = solute potential</p> <p>The water potential will be equal to the solute potential of a solution in an open container because the pressure potential of the solution in an open container is zero.</p> <p>The Solute Potential of a Solution $\Psi_s = -iCRT$ i = ionization constant (this is 1.0 for sucrose because sucrose does not ionize in water) C = molar concentration R = pressure constant ($R = 0.0831$ liter bars/mole K) T = temperature in Kelvin ($^{\circ}\text{C} + 273$)</p>
<p style="text-align: center;">Surface Area and Volume</p> <p>Volume of a Sphere $V = \frac{4}{3} \pi r^3$</p> <p>Volume of a Rectangular Solid $V = \ell wh$</p> <p>Volume of a Right Cylinder $V = \pi r^2 h$</p> <p>Surface Area of a Sphere $A = 4\pi r^2$</p> <p>Surface Area of a Cube $A = 6s^2$</p> <p>Surface Area of a Rectangular Solid $A = \Sigma$ surface area of each side</p>	<p>r = radius ℓ = length h = height w = width s = length of one side of a cube A = surface area V = volume Σ = sum of all</p>	<p>Dilution (used to create a dilute solution from a concentrated stock solution) $C_i V_i = C_f V_f$ i = initial (starting) C = concentration of solute f = final (desired) V = volume of solution</p> <p>Gibbs Free Energy $\Delta G = \Delta H - T\Delta S$ ΔG = change in Gibbs free energy ΔS = change in entropy ΔH = change in enthalpy T = absolute temperature (in Kelvin)</p> <p>$\text{pH} = -\log_{10} [\text{H}^+]$</p>

2019 AP[®] BIOLOGY FREE-RESPONSE QUESTIONS

BIOLOGY

Section II

Total Time—1 hour and 30 minutes

Reading Period—10 minutes

Writing Period—1 hour and 20 minutes

8 Questions

Directions: Questions 1 and 2 are long free-response questions that require about 22 minutes each to answer and are worth 10 points each. Questions 3–8 are short free-response questions that require about 6 minutes each to answer. Questions 3–5 are worth 4 points each and questions 6–8 are worth 3 points each.

Read each question carefully and completely. You are advised to spend the 10-minute reading period planning your answers. You may begin writing your responses before the reading period is over. Write your response in the space provided for each question. Only material written in the space provided will be scored. Answers must be written out in paragraph form. Outlines, bulleted lists, or diagrams alone are not acceptable.

2019 AP[®] BIOLOGY FREE-RESPONSE QUESTIONS

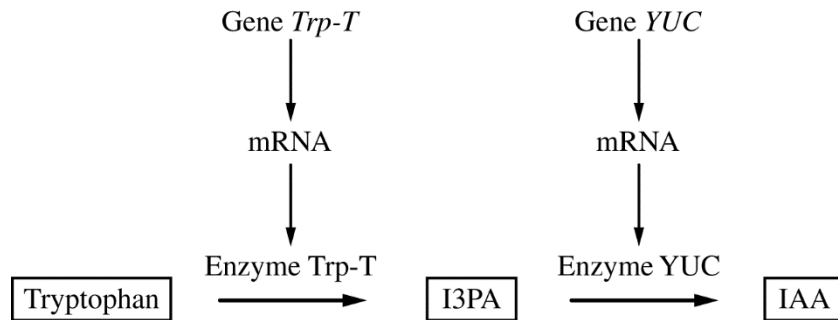


Figure 1. Model of two-step enzymatic plant pathway for synthesis of IAA from tryptophan

1. Auxins are plant hormones that coordinate several aspects of root growth and development. Indole-3-acetic acid (IAA) is an auxin that is usually synthesized from the amino acid tryptophan (Figure 1). Gene *Trp-T* encodes an enzyme that converts tryptophan to indole-3-pyruvic acid (I3PA), which is then converted to IAA by an enzyme encoded by the gene *YUC*.
 - (a) **Circle** ONE arrow that represents transcription on the template pathway. **Identify** the molecule that would be absent if enzyme YUC is nonfunctional.
 - (b) **Predict** how the deletion of one base pair in the fourth codon of the coding region of gene *Trp-T* would most likely affect the production of IAA. **Justify** your prediction.
 - (c) **Explain** one feedback mechanism by which a cell could prevent production of too much IAA without limiting I3PA production.
 - (d) Rhizobacteria are a group of bacteria that live in nodules on plant roots. Rhizobacteria can produce IAA and convert atmospheric nitrogen into forms that can be used by plants. Plants release carbon-containing molecules into the nodules. Based on this information, **identify** the most likely ecological relationship between plants and rhizobacteria. **Describe** ONE advantage to the bacteria of producing IAA.
 - (e) A researcher removed a plant nodule and identified several “cheater” rhizobacteria that do not produce IAA or fix nitrogen. **Describe** the evolutionary advantage of being a bacterial cheater in a population composed predominantly of noncheater bacteria. Plants can adjust the amount of carbon-containing molecules released into nodules in response to the amount of nitrogen fixed in the nodule. **Predict** the change in the bacterial population that would cause the plant to reduce the amount of carbon-containing molecules provided to the nodule.

2019 AP[®] BIOLOGY FREE-RESPONSE QUESTIONS

2. A student studying two different aquatic, plant-eating, unicellular protist species (species A and B) designed an experiment to investigate the ecological relationship between the two species (Table 1).

TABLE 1. EXPERIMENTAL TREATMENT GROUPS

Group I.	Species A and B are each grown in separate containers.
Group II.	Species A and B are grown together in the same container.

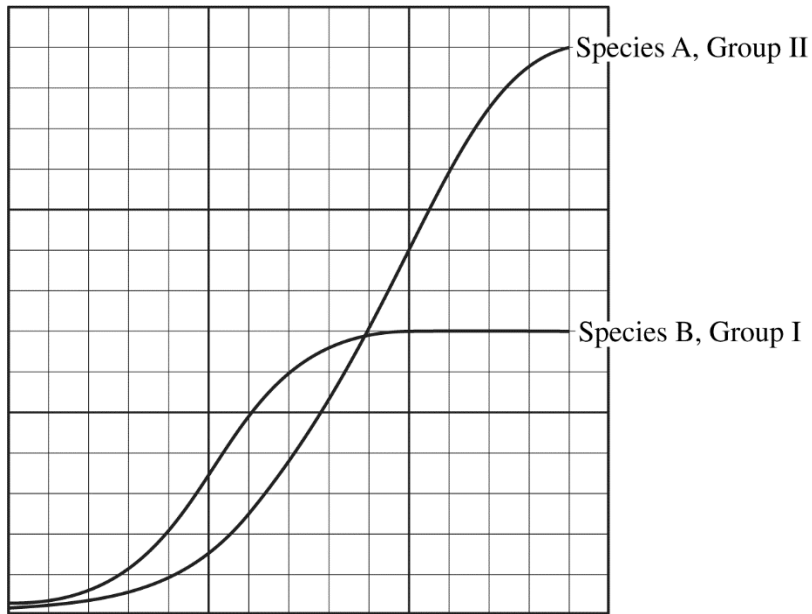
In treatment group I, the student placed 10 individuals of species A into a container with liquid growth medium and 10 individuals of species B into a separate container with an equal amount of the same liquid growth medium. In treatment group II, the student placed 5 individuals of each species into a single container with the liquid growth medium. The student then maintained the containers under the same environmental conditions and recorded the number of individuals in each population at various time points. The results are shown in Table 2.

TABLE 2. NUMBER OF INDIVIDUALS IN EACH PROTIST POPULATION
IN BOTH TREATMENT GROUPS

Time (h)	Group I. Grown Separately		Group II. Grown Together	
	Species A	Species B	Species A	Species B
0	10	10	5	5
10	100	50	45	20
20	400	200	100	50
30	1100	500	250	25
40	1400	650	525	20
50	1500	700	900	10
60	1500	700	1250	0
70	1500	700	1400	0

- (a) The growth curves for species B in group I and for species A in group II (shaded columns) have been plotted on the template. Use the template to **complete** an appropriately labeled line graph to illustrate the growth of species A in treatment group I and species B in treatment group II (unshaded columns).
- (b) As shown in the table, the student established treatment group II with 5 individuals of each species. **Provide reasoning** for the reduced initial population sizes.
- (c) The student claims that species A and B compete for the same food source. **Provide TWO pieces of evidence** from the data that support the student's claim.
- (d) **Predict** TWO factors that will most likely limit the population growth of species A in treatment group I.
- (e) Many protists contain an organelle called a contractile vacuole that pumps water out of the cell. The student repeated the experiment using a growth medium with a lower solute concentration. **Predict** how the activity of the contractile vacuole will change under the new experimental conditions. **Justify** your prediction.

2019 AP[®] BIOLOGY FREE-RESPONSE QUESTIONS



2019 AP[®] BIOLOGY FREE-RESPONSE QUESTIONS

3. The pyruvate dehydrogenase complex (PDC) catalyzes the conversion of pyruvate to acetyl-CoA, a substrate for the Krebs (citric acid) cycle. The rate of pyruvate conversion is greatly reduced in individuals with PDC deficiency, a rare disorder.
- (a) **Identify** the cellular location where PDC is most active.
 - (b) **Make a claim** about how PDC deficiency affects the amount of NADH produced by glycolysis AND the amount of NADH produced by the Krebs (citric acid) cycle in a cell. **Provide reasoning** to support your claims based on the position of the PDC-catalyzed reaction in the sequence of the cellular respiration pathway.
 - (c) PDC deficiency is caused by mutations in the *PDHAI* gene, which is located on the X chromosome. A male with PDC deficiency and a homozygous female with no family history of PDC deficiency have a male offspring. **Calculate** the probability that the male offspring will have PDC deficiency.

2019 AP[®] BIOLOGY FREE-RESPONSE QUESTIONS

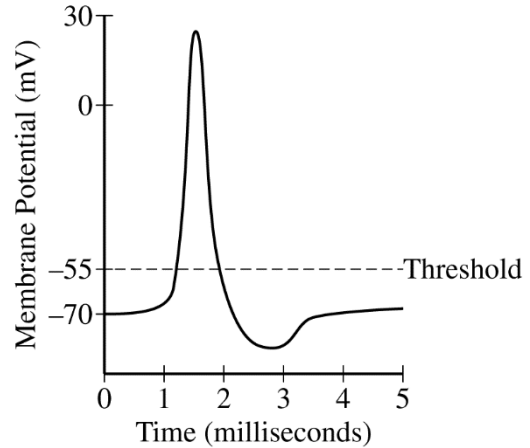
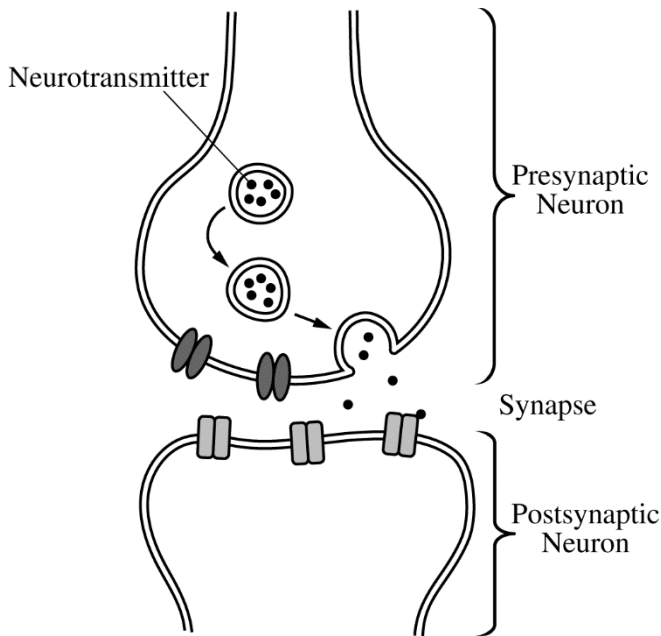


Figure 1. Release of neurotransmitters into the synapse in response to an action potential

Figure 2. Model of a typical action potential in a neuron

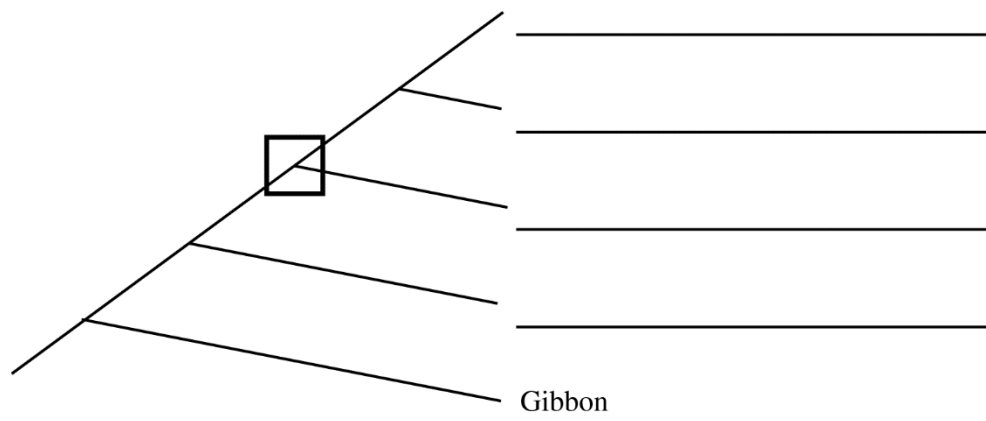
4. Acetylcholine is a neurotransmitter that can activate an action potential in a postsynaptic neuron (Figures 1 and 2). A researcher is investigating the effect of a particular neurotoxin that causes the amount of acetylcholine released from presynaptic neurons to increase.
- Describe** the immediate effect of the neurotoxin on the number of action potentials in a postsynaptic neuron. **Predict** whether the maximum membrane potential of the postsynaptic neuron will increase, decrease, or stay the same.
 - The researcher proposes two models, A and B, for using acetylcholinesterase (AChE), an enzyme that degrades acetylcholine, to prevent the effect of the neurotoxin. In model A, AChE is added to the synapse. In model B, AChE is added to the cytoplasm of the postsynaptic cell. **Predict** the effectiveness of EACH proposed model. **Provide reasoning** to support your predictions.

2019 AP[®] BIOLOGY FREE-RESPONSE QUESTIONS

TABLE 1. DIVERGENCE (IN PERCENT) OF MITOCHONDRIAL DNA SEQUENCES AMONG FIVE PRIMATE SPECIES

	Human	Gorilla	Orangutan	Gibbon	Chimpanzee
Human	-	10.3	16.1	18.1	8.8
Gorilla		-	16.7	18.9	10.6
Orangutan			-	18.9	17.2
Gibbon				-	18.9
Chimpanzee					-

5. A researcher studying the evolutionary relationship among five primate species obtained data from a sequence of mitochondrial DNA (mtDNA) from a representative individual of each species. The researcher then calculated the percent divergence in the sequences between each pair of primate species (Table 1).
- Based on fossil data, the researcher estimates that humans and their most closely related species in the data set diverged approximately seven million years ago. Using these data, **calculate** the rate of mtDNA percent divergence per million years between humans and their most closely related species in the data set. Round your answer to two decimal places.
 - Using the data in the table, **construct** a cladogram on the template provided. **Provide reasoning** for the placement of gibbons as the outgroup on the cladogram.
 - On the cladogram, **draw** a circle around all of the species that are descended from the species indicated by the node within the square.



2019 AP[®] BIOLOGY FREE-RESPONSE QUESTIONS

	MEDIUM	STRAINS		
		Wild Type	Mutant 1	Mutant 2
Treatment I	All amino acids present	+	+	+
Treatment II	No amino acids present	+	–	–
Treatment III	All amino acids present EXCEPT methionine	+	–	+
Treatment IV	All amino acids present EXCEPT leucine	+	+	–

Table 1. The data show the growth of haploid *Saccharomyces cerevisiae* yeast strains on media that differ in amino acid content. A plus sign (+) indicates that the yeast strains grow, and a minus sign (–) indicates that the strains do not grow.

6. The yeast *Saccharomyces cerevisiae* is a single-celled organism. Amino acid synthesis in yeast cells occurs through metabolic pathways, and enzymes in the synthesis pathways are encoded by different genes. The synthesis of a particular amino acid can be prevented by mutation of a gene encoding an enzyme in the required pathway.

A researcher conducted an experiment to determine the ability of yeast to grow on media that differ in amino acid content. Yeast can grow as both haploid and diploid cells. The researcher tested two different haploid yeast strains (Mutant 1 and Mutant 2), each of which has a single recessive mutation, and a haploid wild-type strain. The resulting data are shown in Table 1.

- (a) **Identify** the role of treatment I in the experiment.
- (b) **Provide reasoning** to explain how Mutant 1 can grow on treatment I medium but cannot grow on treatment III medium.
- (c) Yeast mate by fusing two haploid cells to make a diploid cell. In a second experiment, the researcher mates the Mutant 1 and Mutant 2 haploid strains to produce diploid cells. Using the table provided, **predict** whether the diploid cells will grow on each of the four media. Use a plus sign (+) to indicate growth and a minus sign (–) to indicate no growth.

2019 AP[®] BIOLOGY FREE-RESPONSE QUESTIONS

	MEDIUM	STRAINS			Diploid Cells Produced by Mating Mutant 1 and Mutant 2
		Wild Type (haploid)	Mutant 1 (haploid)	Mutant 2 (haploid)	
Treatment I	All amino acids present	+	+	+	
Treatment II	No amino acids present	+	-	-	
Treatment III	All amino acids present EXCEPT methionine	+	-	+	
Treatment IV	All amino acids present EXCEPT leucine	+	+	-	

2019 AP[®] BIOLOGY FREE-RESPONSE QUESTIONS

7. A researcher is studying patterns of gene expression in mice. The researcher collected samples from six different tissues in a healthy mouse and measured the amount of mRNA from six genes. The data are shown in Figure 1.


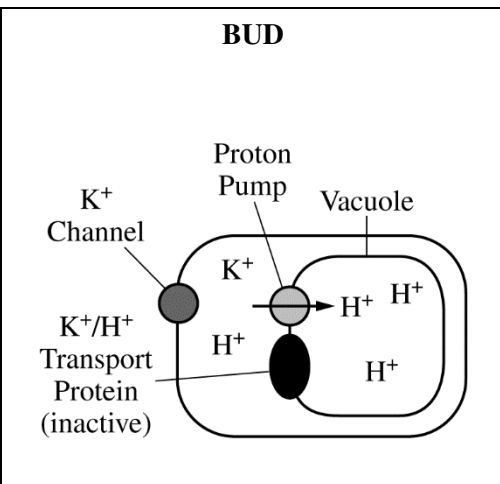
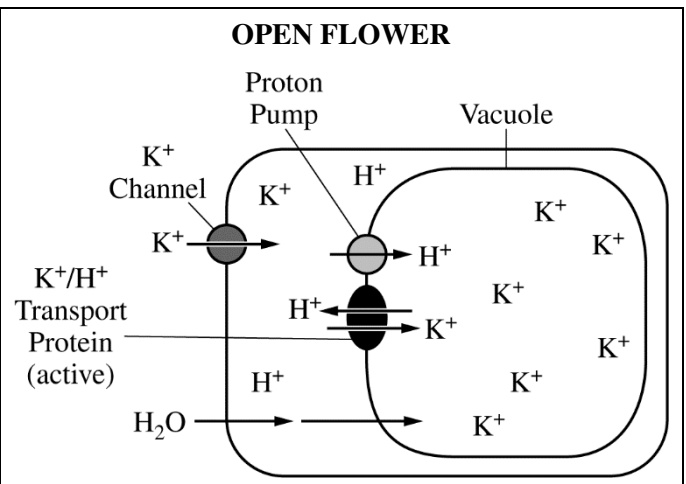


Figure 1. mRNA expression levels of six genes

- (a) Based on the data provided, **identify** the gene that is most likely to encode a protein that is an essential component of glycolysis. **Provide reasoning** to support your identification.
- (b) The researcher observed that tissues with a high level of *gene H* mRNA did not always have gene H protein. **Provide reasoning** to explain how tissues with high *gene H* mRNA levels can have no gene H protein.

2019 AP[®] BIOLOGY FREE-RESPONSE QUESTIONS

TABLE 1. CHANGES IN MORNING GLORY PETAL CELLS DURING FLOWER OPENING

	BUD	OPEN FLOWER
		
Vacuole pH	6.6	7.7
Flower Color	Red	Blue
Cell Volume	Small	Large

8. The petal color of the Mexican morning glory (*Ipomoea tricolor*) changes from red to blue, and the petal cells swell during flower opening. The pigment heavenly blue anthocyanin is found in the vacuole of petal cells. Petal color is determined by the pH of the vacuole. A model of a morning glory petal cell before and after flower opening is shown in Table 1.
- Identify** the cellular component in the model that is responsible for the increase in the pH of the vacuole during flower opening **AND describe** the component's role in changing the pH of the vacuole.
 - A researcher claims that the activation of the K^+/H^+ transport protein causes the vacuole to swell with water. **Provide reasoning** to support the researcher's claim.

STOP

END OF EXAM